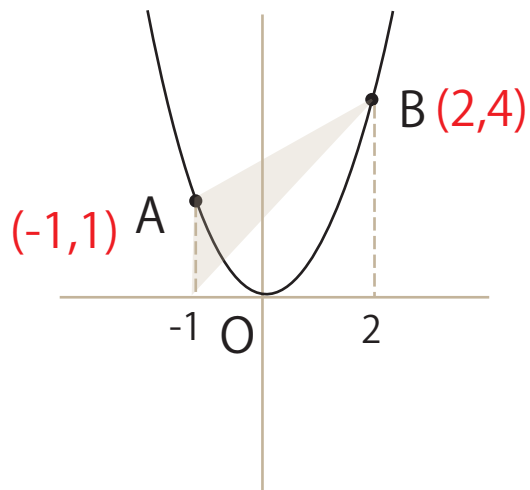


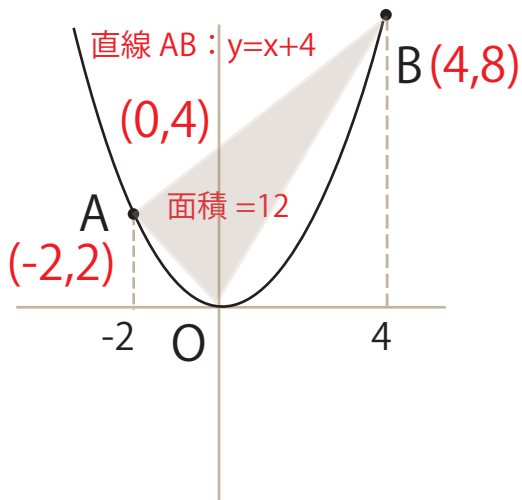
二次関数 三角形の面積

色のついた三角形の面積を求めましょう

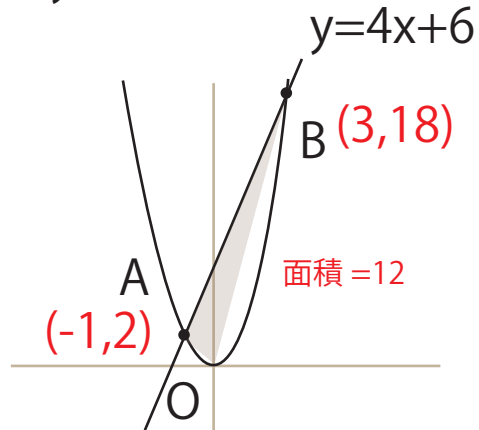
$y = x^2$
面積: $1 \times 3 \times \frac{1}{2} = \frac{3}{2}$



$y = \frac{1}{2}x^2$



$y = 2x^2$



$y = \frac{1}{3}x^2$

